

1) Which amount shows £4?



2) Use  $<$ ,  $>$  or  $=$  to compare.



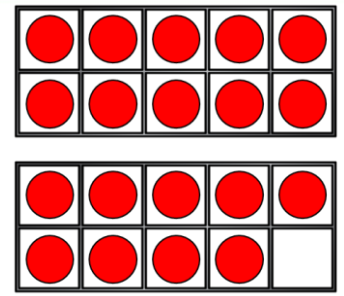
3)  $42 + 27 = \square$

4) Complete the sentence.

45 has \_\_\_\_ tens and \_\_\_\_ ones.

# Flashback 4

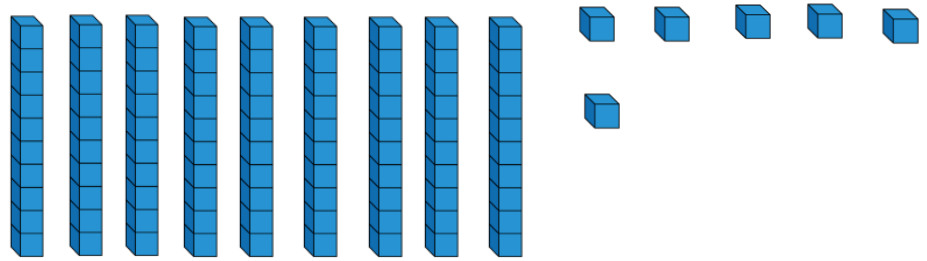
1) Circle the box with the greatest amount.



2) How much money is there altogether?



3)  $96 - 34 = \square$



4) Tomorrow is Wednesday, so yesterday was \_\_\_\_\_.

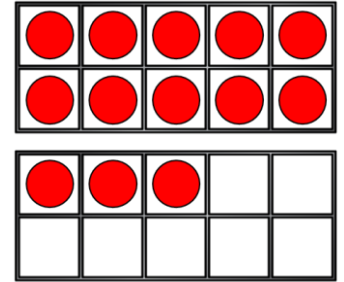
- 1) Eva buys a banana and an apple.  
How much does she spend?



41 p




32 p



- 2) Complete the bar model.



- 3)  $84 \text{ minus } 36 = \square$



- 4) What time is shown on the clock?

# Flashback 4

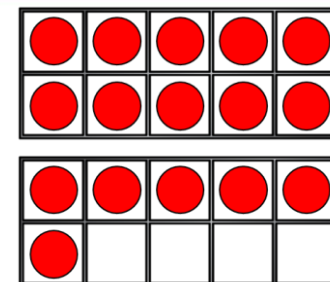
Year 2 | Week 10 | Day 4

1) Find the difference.



99 p

41 p




2) Which set of coins is the odd one out?



3)  $20 + \square = 100$

4) What is one more than 82?



1) Tommy spends 52p. He pays with a £2 coin.  
How much change will he get?

2) How much money is there altogether?



3) Find the totals of each row and column.

5	4	5	<input type="text"/>
3	6	1	<input type="text"/>
7	2	4	<input type="text"/>
<input type="text"/>	<input type="text"/>	<input type="text"/>	

4) Complete the sentence.

The pentagon has turned a \_\_\_\_\_ turn.

