


Flashback 4

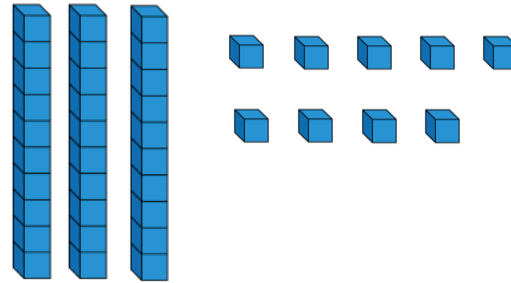
Year 2 | Week 9 | Day 1

1) Use $<$, $>$ or $=$ to compare.

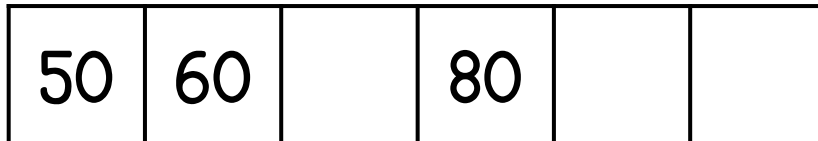
$$9 + 6 + 1 \quad \bigcirc \quad 5 + 3 + 5$$



2) Subtract 11 from 39

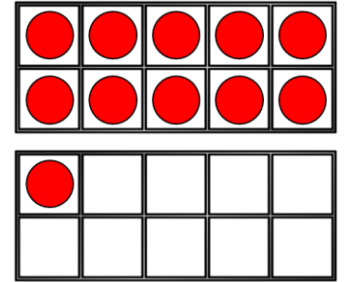


3) Complete the number track.



4) Today is Monday, so tomorrow is _____.

1) Count the money.

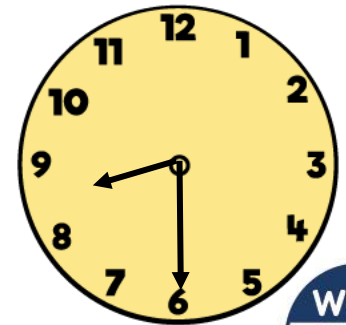


2) $54 - 19 = \square$

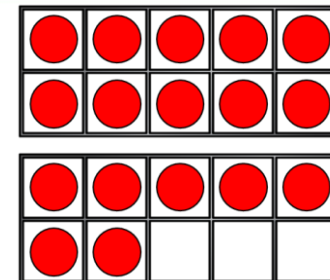
Tens	Ones

3) $27 + 20 = \square$

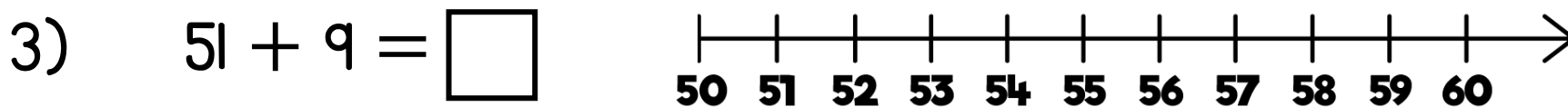
4) What time is shown on the clock?



1) Complete the bar model.

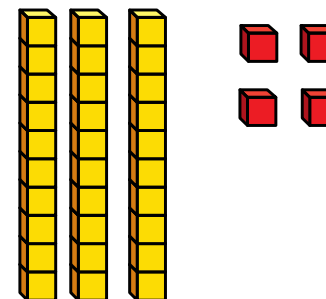


2) $\square + 36 = 100$




4) The Base 10 shows the number 34
Complete the sentence.

34 has ____ tens and ____ ones.




1) How much money is there altogether?



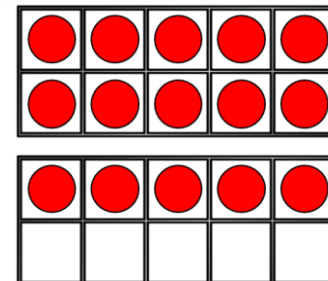
2) $100 - 83 = \square$

3) $31 - 8 = \square$

4) How many bread rolls are there altogether?



1) Which does not show 35p?



2) Teddy has 7 sweets. Dexter has 8 sweets. Ron has 3 sweets. How many sweets do they have altogether?

3) $32 + 46 = \square$

4) Complete the sentence.

The triangle has turned a _____ turn.

