



1) How many cubes high is the tube?



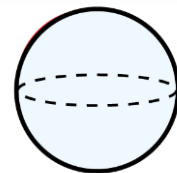
2) Complete the sentence using taller or shorter.



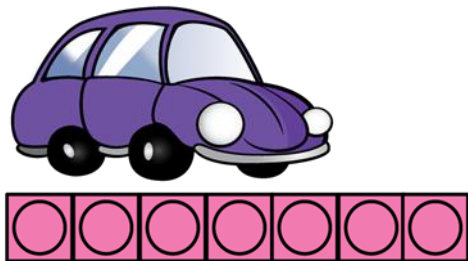
The hen is _____ than the horse.

3) Which is greater, 28 or 32?

4) What is $8 + 5$?



1) How many cubes long is the car?



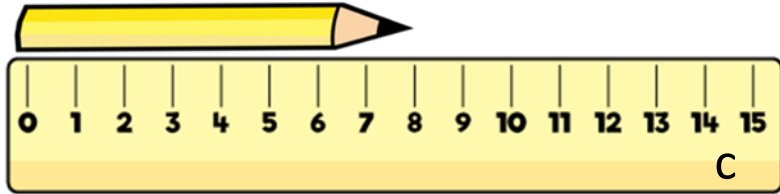
2) Which is taller, the house or the tree?



3) Write a 2-digit number that is less than 17

4) What is 5 more than 13?

1) How long is the pencil?



2) Complete the sentence. m



Mr Rose

Mrs White


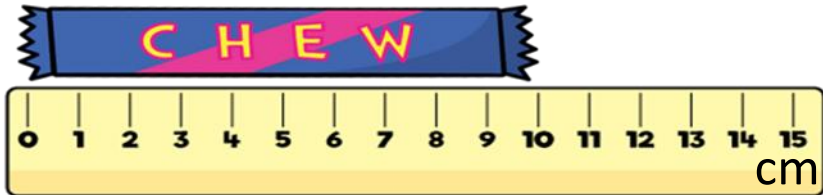
Mr Rose is _____ than Mrs White.

3) What is one more than 32?

4) Write 15 in words.

Flashback 4

1) How long is the chew bar?



2) Complete the sentence.

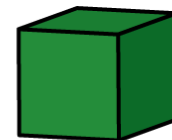


The _____ is taller than the _____.

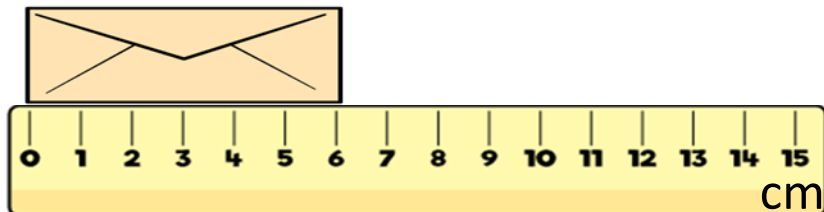
3) How many cherries altogether?



4) What is $13 - 4$?



1) How long is the envelope?



2) Complete the sentence.



The _____ is shorter than the _____.

3) How many wheels altogether?



4) What is $13 + 4$?